

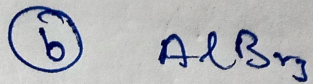
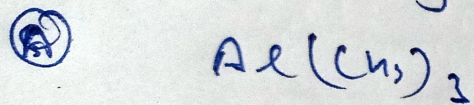


Q.] Which of the following has the least tendency to dimerise?



Ans: (C) $Al(\text{C}_6\text{H}_5)_3$ due to lot's of steric hindrance.