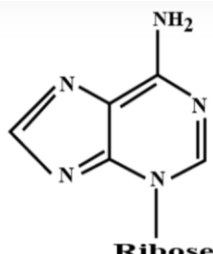
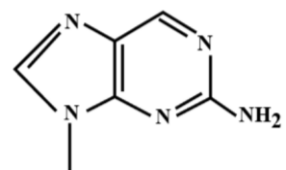
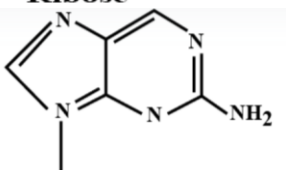
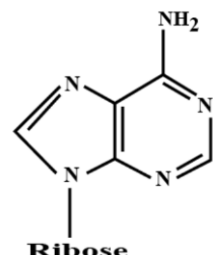


Which of the following is the correct structure of adenosine?

- A.   
Ribose
- B.   
Ribose
- C.   
Ribose
- D.   
Ribose

Ans. D