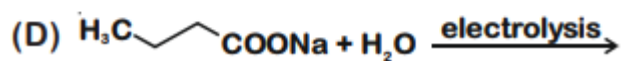
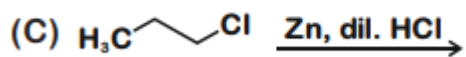
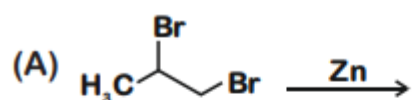


Question 9. Which of the following reaction produce propane as a major product?



Solution: (B and C)

