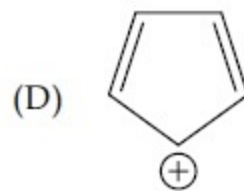
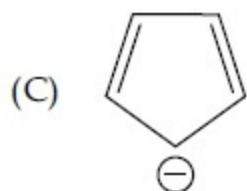
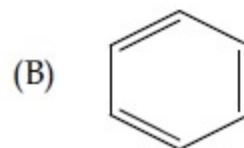
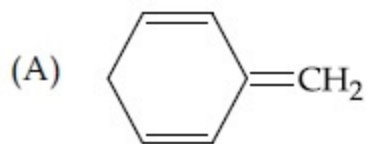


Among the following, the aromatic compounds are :



Ans : B and C

Reason : Both B and C follow huckle rule of $2n+1$ and are sp^2 on each carbon being planar