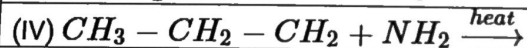
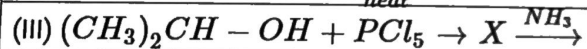
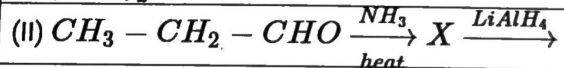
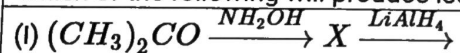


Which of the following will produce isopropyl amine-



A) I, II

B) II, III

C) I, III

D) IV only

Correct Answer: C

Solution :

