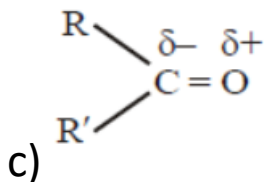
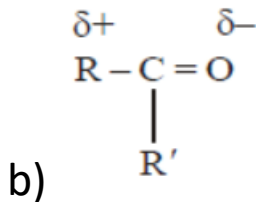
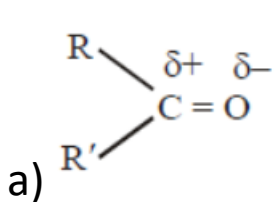


## Question:

Which of the following is correct for carbonyl compounds?



d) None of these

Answer:

